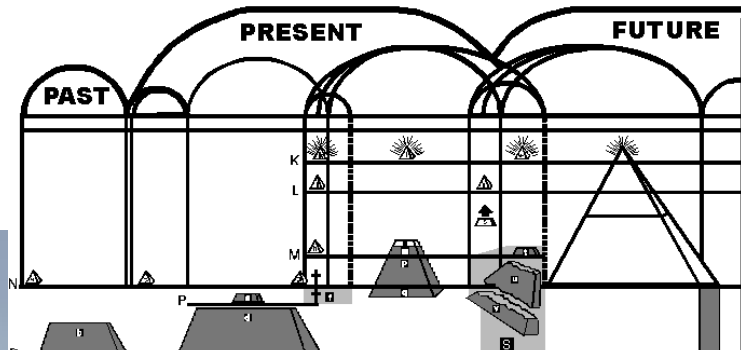


God's Plan of the Ages



in the
**Great Pyramid
of Egypt**

Seven Wonders of the Ancient World

Great Pyramid of Giza (Egypt);
Hanging Gardens of Babylon
(Iraq);

Temple of Artemis (Turkey);
Statue of Zeus (Greece);

Mausoleum of Halicarnassus;
Colossus at Rhodes (Greek Island);

Lighthouse of Alexandria
(drawing) (Egypt).



1. Of the Seven Wonders of the Ancient World, why is the Great Pyramid of Egypt at the top of the list?

2. What is unique about the Great Pyramid that is very different from all the other pyramids near it?

3. As Egyptian history records a time when peaceful "shepherd kings" came into their land for a time—who might have been the planner God used to build the Great Pyramid? (Genesis 14:18 "Salem" = peace)

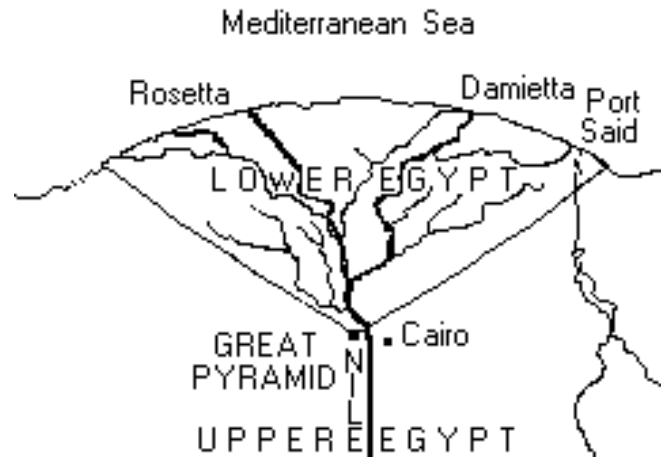
4. What name is inscribed on the stones in the construction chambers that would indicate the name of the builder?



5. Isaiah makes a statement that seems to describe the Great Pyramid's location. Explain how it can be both in the middle and the border:

Isaiah 19:19-20

"In that day shall there be an altar to the LORD in the midst of the land of Egypt and a pillar at the border thereof to the LORD. And it shall be for a sign and for a witness unto the LORD of hosts in the land of Egypt..."



6. How is the Great Pyramid a "witness" about God in the world?

7. What "day" was the Pyramid to be particularly understood and appreciated?

8. Besides the shiny casing stones, what is actually missing from the Great Pyramid of Giza?



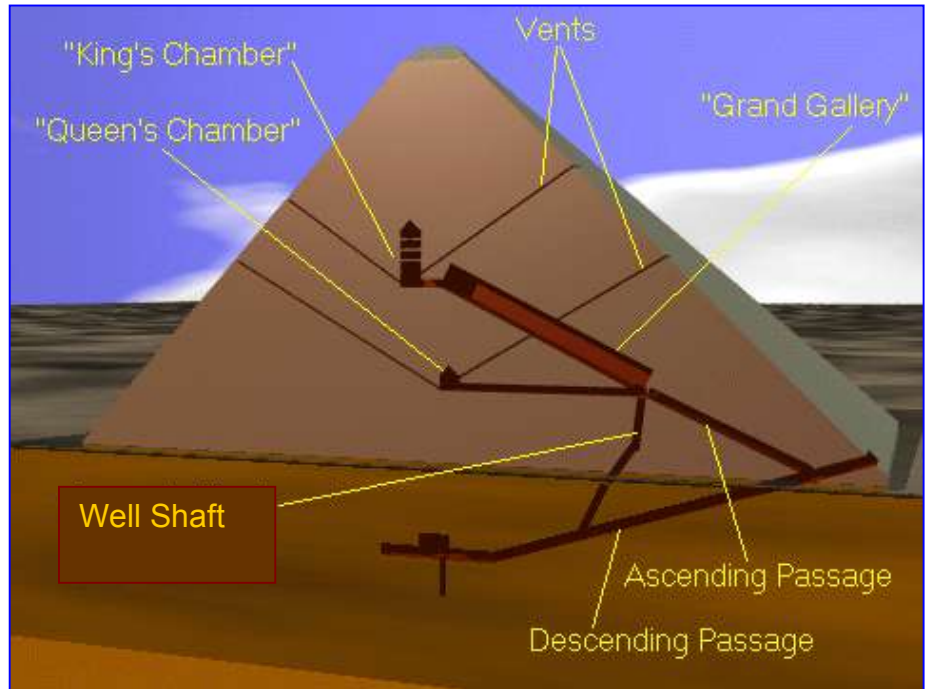
9. In what way was Jesus rejected as the "chief cornerstone"?
- (Isaiah 28:16; Ephesians 2:20; I Peter 2:6)

Matthew 21:42

"Jesus said to them, 'Did you never read in the Scriptures, 'The stone which the builders rejected, This became the chief corner stone...it is marvelous in our eyes.'"



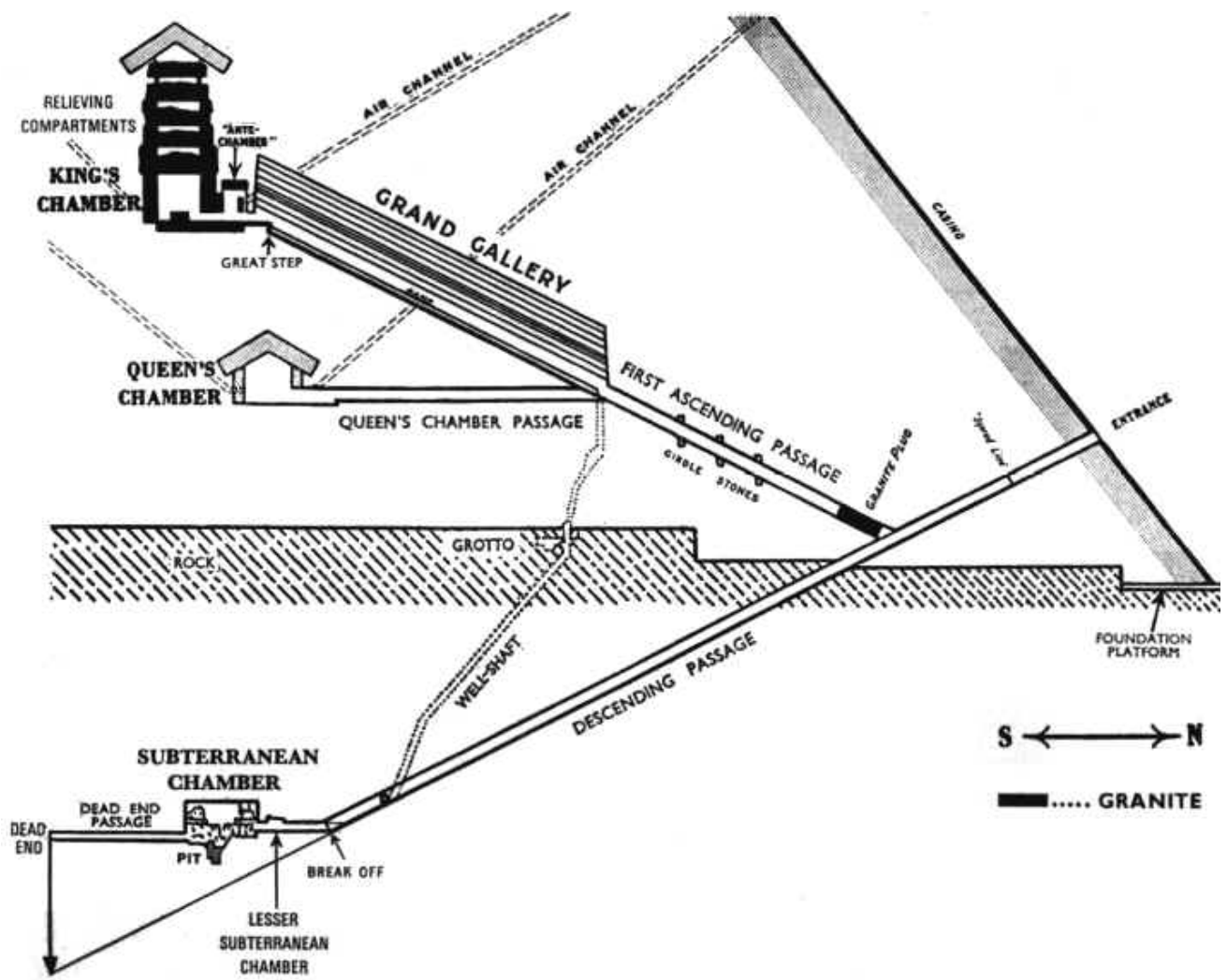
10. The Entrance Way to the Great Pyramid descends to a _____ representing death (1 Corinthians 15:22).



(Where are these two brothers in the Great Pyramid? _____)




11. As the First Ascending Passage is blocked, what is the only escape for all mankind (the Well Shaft) from that downward path?



12. What does the Red Granite Plug blocking the way up the First Ascending Passage picture? (Romans 3:20)

13. At the upper end of the Ascending Passage and the Well Shaft is the Grand Gallery. Describe it and explain what it pictures:



The calling is:

Philippians 3:14

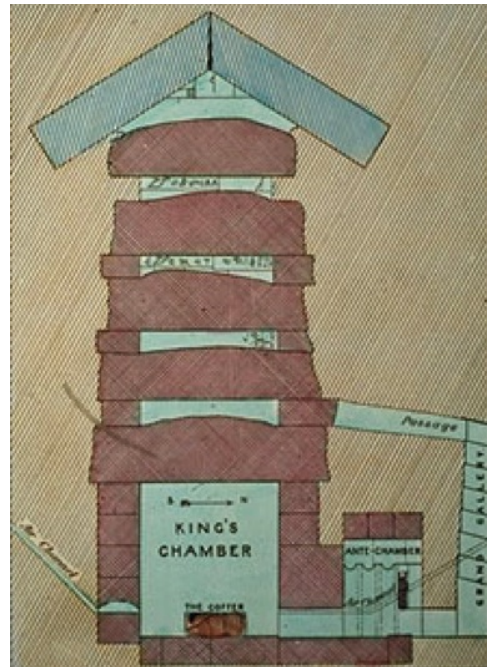
The upward way is:

Matthew 7:14

14. To enter the King's Chamber—like the Most Holy of the Tabernacle—one must bend low 2 times showing:

1) First Veil (granite leaf)

2) Second Veil (granite)



15. In the King's Chamber, what might indicate life? _____

What kind of life? _____

(Romans 2:7)

What kind of role? _____

(Revelation 1:6)

16. The volume size of the Coffin in the King's chamber is similar in volume to what in the Most Holy of the Tabernacle?




17. Although most of the Great Pyramid is made from limestone, the King's Chamber is made out of _____ which corresponds to the _____ of the Tabernacle representing _____ nature.

18. Also, beginning at the opening of the Well Shaft, a low horizontal passageway leads to another Chamber called:

19. Again, what does this Chamber have similar to the Kings' Chamber that indicates life?

20. What kind of life? (1 Corinthians 15:22, 23, 40)

21. In conclusion, what do the pyramid levels on the Divine Plan of the Ages Chart show?



< _____
< Great Company _____
< _____
< _____

22. What then does the pyramid's aligned shape of show about God's Plan for all mankind? _____

